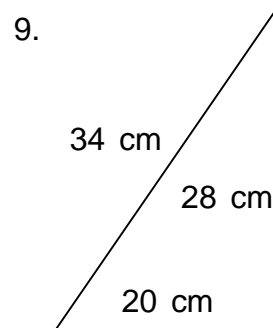
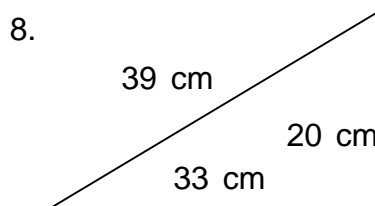
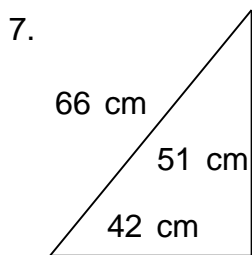
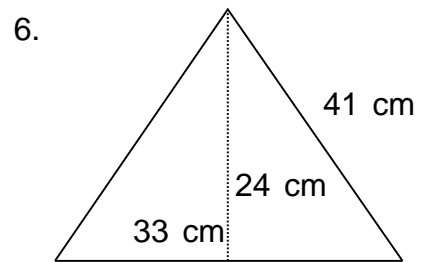
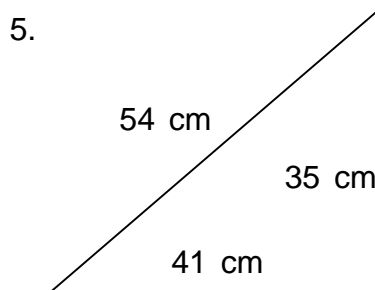
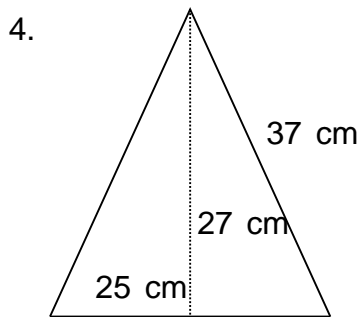
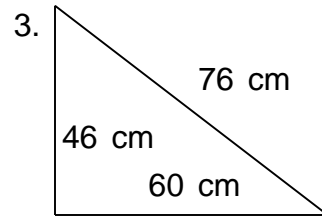
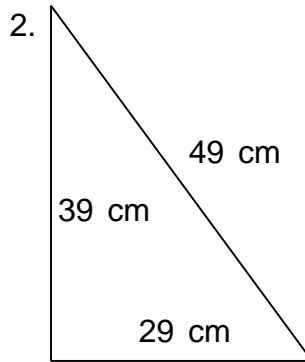
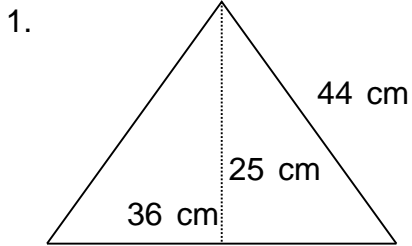


Name: _____

Class: _____

PERIMETER AND AREA

Find the perimeter and area.



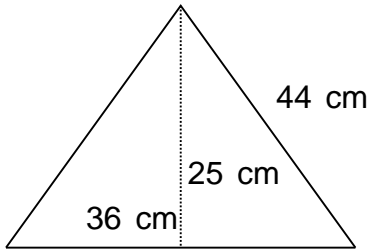
Name: _____

Class: _____

PERIMETER AND AREA

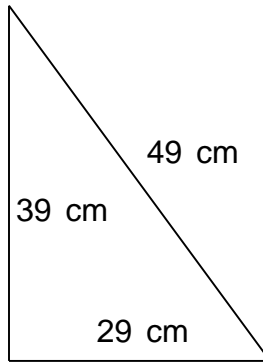
Find the perimeter and area.

1.



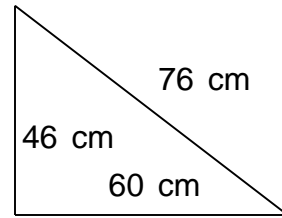
$P = 124 \text{ cm}$ $A = 450 \text{ cm}^2$

2.



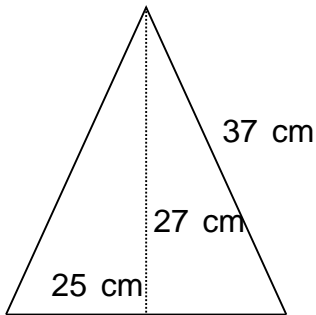
$P = 117 \text{ cm}$ $A = 565.5 \text{ cm}^2$

3.



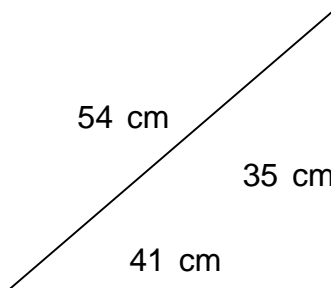
$P = 182 \text{ cm}$ $A = 1,380 \text{ cm}^2$

4.



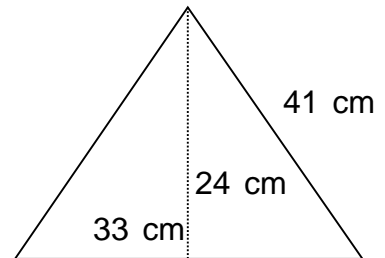
$P = 99 \text{ cm}$ $A = 337.5 \text{ cm}^2$

5.



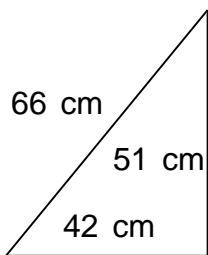
$P = 130 \text{ cm}$ $A = 717.5 \text{ cm}^2$

6.



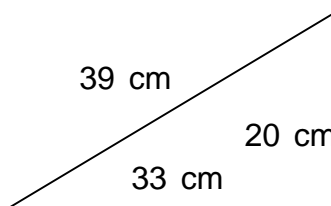
$P = 115 \text{ cm}$ $A = 396 \text{ cm}^2$

7.



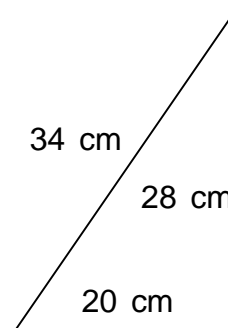
$P = 159 \text{ cm}$ $A = 1,071 \text{ cm}^2$

8.



$P = 92 \text{ cm}$ $A = 330 \text{ cm}^2$

9.



$P = 82 \text{ cm}$ $A = 280 \text{ cm}^2$