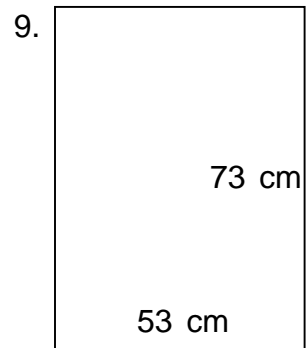
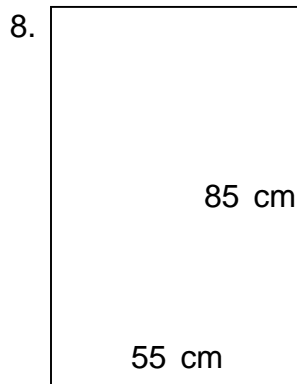
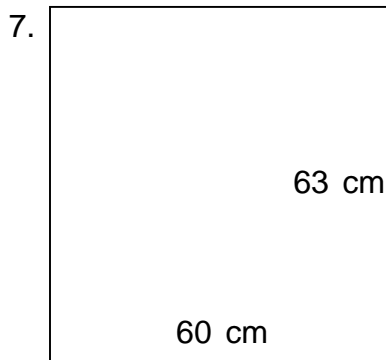
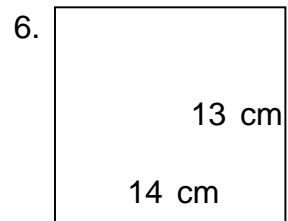
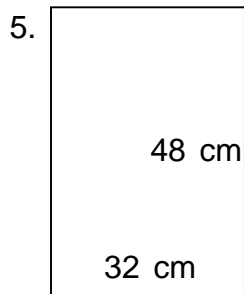
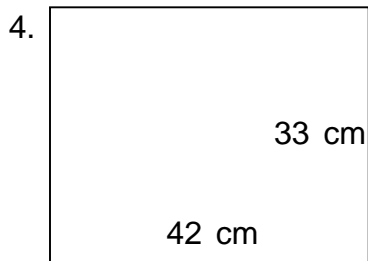
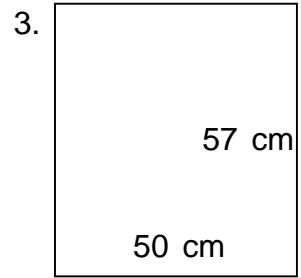
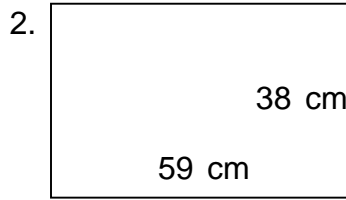
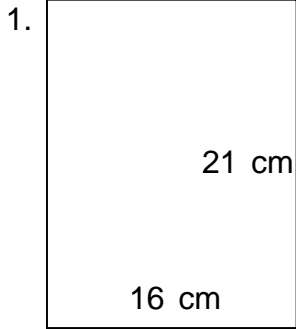


Name: _____

Class: _____

PERIMETER AND AREA

Find the perimeter and area.

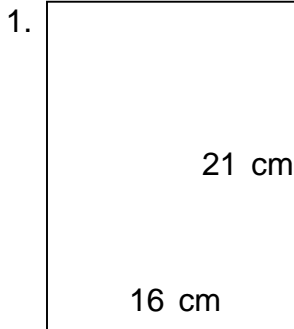


Name:

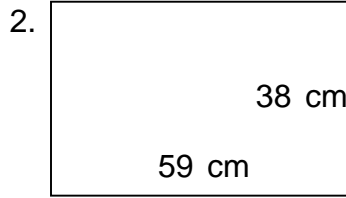
Class:

PERIMETER AND AREA

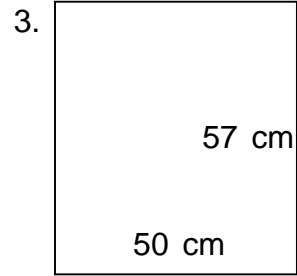
Find the perimeter and area.



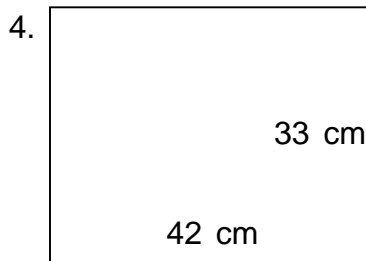
$P = 74 \text{ cm} \quad A = 336 \text{ cm}^2$



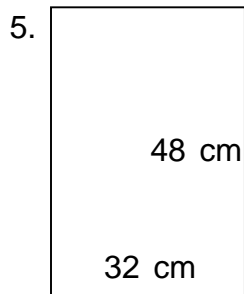
$P = 194 \text{ cm} \quad A = 2,242 \text{ cm}^2$



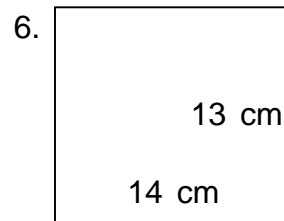
$P = 214 \text{ cm} \quad A = 2,850 \text{ cm}^2$



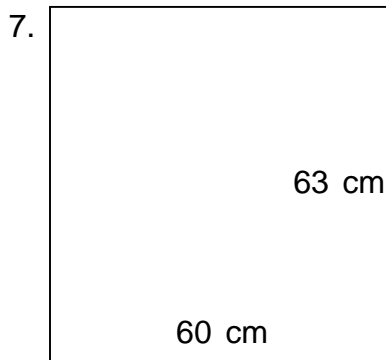
$P = 150 \text{ cm} \quad A = 1,386 \text{ cm}^2$



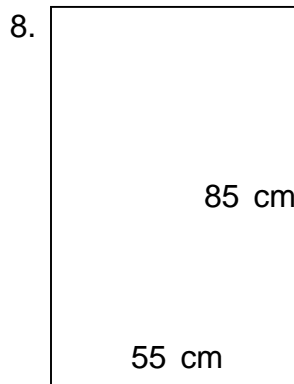
$P = 160 \text{ cm} \quad A = 1,536 \text{ cm}^2$



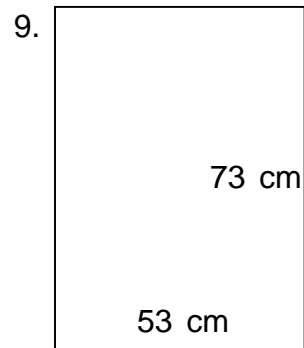
$P = 54 \text{ cm} \quad A = 182 \text{ cm}^2$



$P = 246 \text{ cm} \quad A = 3,780 \text{ cm}^2$



$P = 280 \text{ cm} \quad A = 4,675 \text{ cm}^2$



$P = 252 \text{ cm} \quad A = 3,869 \text{ cm}^2$